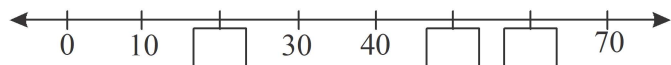
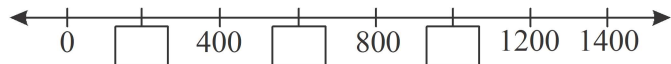
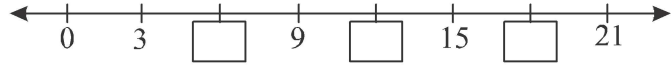
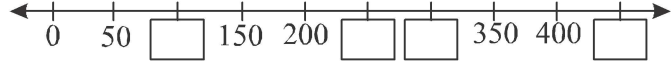


Time: 10 Minutes	Paper Math 3 (T-1)	Total Marks: 10
1st Month, 4th Week, 3rd Day	Unit # 1: Review Exercise Q. No. 7 & 8	

Q.No.1. Write the missing numbers on number line. (1×6=6)

نمبر لائن پر چھوڑے ہوئے اعداد لکھیں۔



Q.No.2. Write the even and odd numbers separately. (2x 2 = 4)

جفت اور طاق اعداد کو الگ الگ لکھیں۔

(i) 15 34 45 64 71 77 84 88

Even numbers:

جفت اعداد

Odd numbers:

طاق اعداد

(ii) 19 24 36 43 57 76 84 94

Even numbers:

جفت اعداد

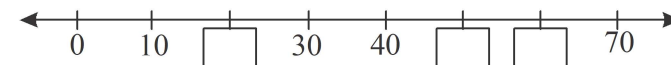
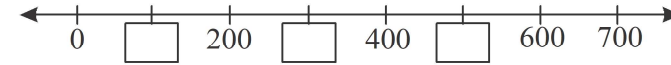
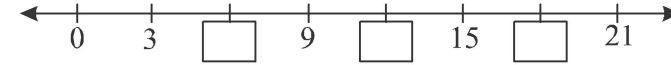
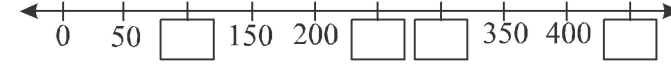
Odd numbers:

طاق اعداد

Time: 10 Minutes	Paper Math 3 (T-1)	Total Marks: 10
1st Month, 4th Week, 3rd Day	Unit # 1: Review Exercise Q. No. 7 & 8	

Q.No.1. Write the missing numbers on number line. (1×6=6)

نمبر لائن پر چھوڑے ہوئے اعداد لکھیں۔



Q.No.2. Write the even and odd numbers separately. (2x 2 = 4)

جفت اور طاق اعداد کو الگ الگ لکھیں۔

(i) 15 34 45 64 71 77 84 88

Even numbers:

جفت اعداد

Odd numbers:

طاق اعداد

(ii) 19 24 36 43 57 76 84 94

Even numbers:

جفت اعداد

Odd numbers:

طاق اعداد

